


Adding and Subtracting Decimals Match

Alyzia jumped 563.4 cm in 3 minutes. Aubrey jumped 78.934 cm in 1 minute. How far did they jump?	257.046
Axel bought 6 CDs for \$58.25 and Berenice bought 25 CBs for \$173.67. How much money did they spend?	323.092
Camilo drove 893.4 miles in 2 days. Chris drove 456.348 miles in 4 days. How far did they travel altogether?	642.334
Courtney bought 809.3 liters of soda for her Birthday party. She drank 79.312 liters. How much soda does she have left?	219.488
Dyllan bought 346.7 feet of ribbon for an ELP project. He used 89.654 feet. How much does he have left?	231.92
Eriana bought 93 ounces of glitter for an art project. She used 56.789 ounces. How much does she have left?	55.958
Gustavo made a goal from 78.34 yards during a game, while Jean made a goal from 134.298 yards. How much farther did Jean have to kick the ball than Gustavo?	36.211
Jessica had 780 pounds of chocolate. She gave 456.908 pounds to Julio. How much chocolate does Jessica have now?	1349.748
Karen was making quilts. She bought 567.3 yards of fabric. She used 357.8 yards. How much fabric did she have left over?	49.405
Kliston had 89.02 inches of boondoggle. He gave 39.615 inches to Misael. How much does he have now?	209.5
Natalia ran 673.4 yards and Omar ran 453.912 yards. How much farther did Natalia run than Omar?	729.988

DECIMALS

MAZE A




MATH MAZE MATCH

Find a path across using only hexagons that match the starting one

DECIMALS

MAZE B




MATH MAZE MATCH

Find a path across using only hexagons that match the starting one

DECIMALS

M A Z E C



start

MATH
MAZE
MATCH

Find a path across using only hexagons that match the starting one